




Chapter-1: -1:The IPO cycle

A. Write how these machines do the IPO Process

Figure	Input	Process	Output
			
			
			

B. Fill in the blanks using the given word

- All memory related operations are controlled by the _____ unit.
- All mathematical calculations are controlled by _____.
- Output of a _____ is sound.
- What brain is to human, a _____ is to a computer.

C. Answer the following questions.

- Define input and name any three input devices.

- Give any two examples from your daily life to explain the IPO cycle.
