

AZAAN INTERNATIONAL SCHOOL

Grade - I


Activity Sheet- XV

Subject-MATHS

Name: _____ Class: _____ Sec: _____

CHAPTER NO: 15. HANDLING DATA.

I. Look at the given pictures and answer.



- A. How many stars are there? _____
- B. How many circles are there? _____
- C. How many squares are there? _____
- D. How many triangles are there? _____


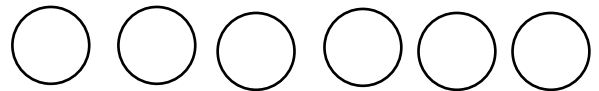


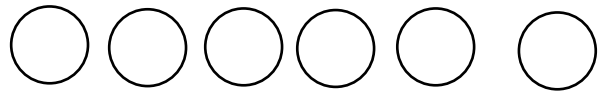
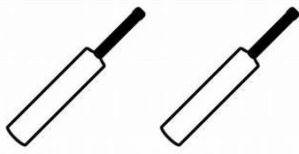
II. Look at the given table and answer.

Class 1 has 20 children. The following are their favourite subjects.




Favourite subject	Number of children
a. Maths	8
b. English	4
c. Evs	5
d. Telugu	3

- A. Which subject is liked by most of the students?
Ans. _____.
- B. Which subject is liked by least number of students?
Ans. _____.
- C. Which subject is liked more English or Evs?
Ans. _____.
- D. How many more children like Math than Telugu?
Ans. _____.
- E. How many children are there in the class-1?
Ans. _____.

III. Count the objects and colour the correct number of circles.



IV. Sort the given animals according to their habitats as water animals, land animals and animals that live both on land and in water.



Water animals – _____

Land animals - _____

Both land and water animals- _____